

O. P. JINDAL SCHOOL, SAVITRI NAGAR
Second Assessment (2022 - 2023)

Class / Section: KG- II (A/B)
Subject: Hindi

MM: 20
Time: 1Hr. 30 mins

Name: _____

Roll No.: _____

Date: _____

Invigilator Sign: _____

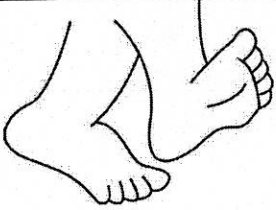




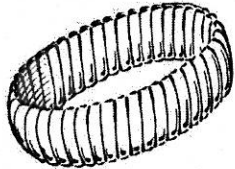




Marks Obtained: _____

Examiner Sign: _____

प्र०१ चित्र देखकर नाम लिखो -

($\frac{1}{2}$ x10=5 Marks)


रेलगाड़ी, जोकर, पैर, कंगन, समोसा, हंस, केला, बोतल, लौकी, खरगोश

 <input type="text"/>	 <input type="text"/>	 <input type="text"/>
 <input type="text"/>	 <input type="text"/>	 <input type="text"/>
 <input type="text"/>	 <input type="text"/>	 <input type="text"/>
	 <input type="text"/>	


प्र०२ चिह्नान करो-

(1/2 x5=2.5 Marks)

• सतरा



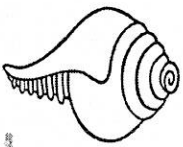
• सोर



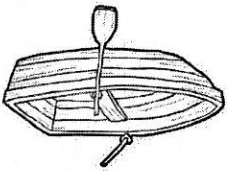
• शंख



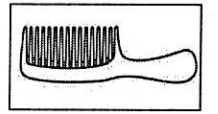
• नौका



• खिलौने




प्र०३ सही शब्द पर गीला (○)बनाओ-




क) कर्षी

क) कर्षी



ख) करेला

ख) करेला



ग) रींथ

ग) रींथ




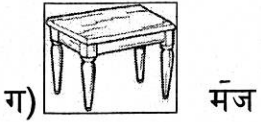
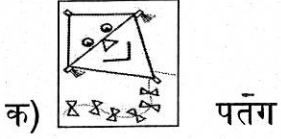
घ) नौका

घ) नौका

(1x4=4 Marks)

प्र०४ मात्रा लगाकर शब्द पूरा करो-


($\frac{1}{2} \times 4 = 2$ Marks)




प्र०५ चित्र पहचानकर खाली स्थान भरो-

($\frac{1}{2} \times 3 = 1.5$ Marks)

पेड़	तोता	बंदर
------	------	------

क) छत पर  _____ बैठा है।

ख)  _____ केला खाता है।

ग) यह आम का  _____ है।

प्र०६ अक्षर उलट कर नए शब्द बनाओ-

($\frac{1}{2} \times 6 = 3$ Marks)

• शय - _____


• जग - _____

• जब - _____

• कप - _____

• बस - _____

• नम - _____



• चित्र में रंग भरिये (केवल मनोरंजन के लिए)-

_____ (क)

_____ (ग)

_____ (ख)

_____ (घ)

प्रश्न- १०७

($\frac{1}{2} \times 4 = 2$ Marks)